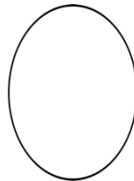
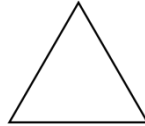





Worksheet-1

1) choose the shapes that has straight sides



A.circle

B.Oval

C.Rectangle

D.Triangle

2) The faces of a sphere are \_\_\_\_\_(flat/curved)

3) Look at the table given and write TRUE / FALSE

Color Choice	Number of Students
Red	8
Blue	7
Green	4
Yellow	12
Orange	10

A.12 students like orange colour.(TRUE / FALSE)

B. 7 students like blue colour.(TRUE / FALSE)

4) A cube is a \_\_\_\_\_ (Solid shape / Flat shape)

5) The number of edges in cuboid is \_\_\_\_\_

- A. 8**      **B. 6**      **C. 0**      **D. 12**

6) Draw the shadow of a

**A. sphere**

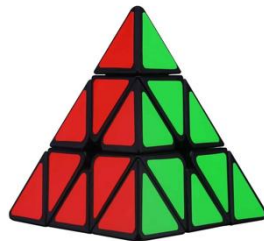
**B. cuboid**



7) write the names of solid shape below each object

**A.** \_\_\_\_\_

**B.** \_\_\_\_\_



**C.** \_\_\_\_\_






**D.** \_\_\_\_\_

8) Draw a figure with 2 squares, 3 triangles, 1 rectangle, 1 circle

9) Make a tally mark table for the data

tomato, brinjal, chilly, onion, onion, tomato, chilly, brinjal, brinjal, chilly,  
onion, chilly, brinjal, tomato, onion, chilly, brinjal, chilly, brinjal, tomato

10) Read the table and answer the questions

Day	Number of pizzas sold
Monday	
Tuesday	
Wednesday	
Thursday	
Friday	

A.how many pizzas did he sell on Thursday?\_\_\_\_\_

B.how many pizzas did he sell on Monday and Wednesday? \_\_\_\_\_

C.which day he sell the most pizzas? \_\_\_\_\_

D.which day he sell the fewest pizzas?\_\_\_\_\_

11)write the number of faces,edges, and corners in these solid shapes.

**A.cuboid**

Edges-

Corners-

Faces-

**B.Cylinder**

Edges-

Corners-

Faces-

**C.Pyramid**

Edges-

Faces-

Corners-

## Worksheet-2

1) Tick the object in which you can see TRIANGLE

A. pizza

B. Ball

C. Clock

D. Bottle



2) The faces of a pyramid are \_\_\_\_\_(flat/curved)

3) Tick the number of balloons sam should draw to make 8 balloons in all.



A. 6 more balloons      B. 5 more balloons

C. 4 more balloons      D. 2 more balloons

4) A cube is a solid shape. \_\_\_\_\_(TRUE / FALSE)

5) The number of corner in Circle is \_\_\_\_\_

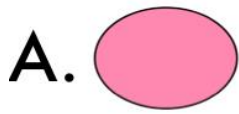
A. 4      B. 3      C. 0      D. 3

6. Draw the shadow of a

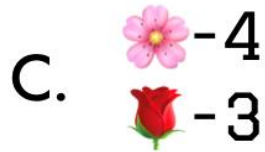
A. pyramid

B. cone

7) Match the following




B. OVAL



D. PYRAMID

8). Count the number of shapes in the picture



9). Draw pictograph to show the number of flowers in rani's garden

<b>DAYS</b>	<b>NUMBER OF FLOWERS</b>
<b>DAY 1</b>	5
<b>DAY 2</b>	8
<b>DAY 3</b>	10
<b>DAY 4</b>	4
<b>DAY 5</b>	7

10) Draw

A.Triangle

B.Square

11).Write the number of faces, edges and corners in

These solid shapes.

A.cube

B.sphere

c.cone

Corners-

corners-

Corners-

Faces-

Faces-

Faces-

Edges-

Edges-

Edges-