



AL KHOZAMA INTERNATIONAL SCHOOL, DAMMAM

B.E.S.T. Group of Schools, K.S.A.

Mathematics

Grade-1

Worksheet 1

Choose the correct answer

1. Circle the days of the week.
a) Today b) Sunday c) tomorrow d) Wednesday

2. Circle the activities that take less time to do.
a) Cooking b) Combing hair c) Washing hands d) Washing clothes

3. Circle the months of the year
a) Monday b) July c) April d) Thursday

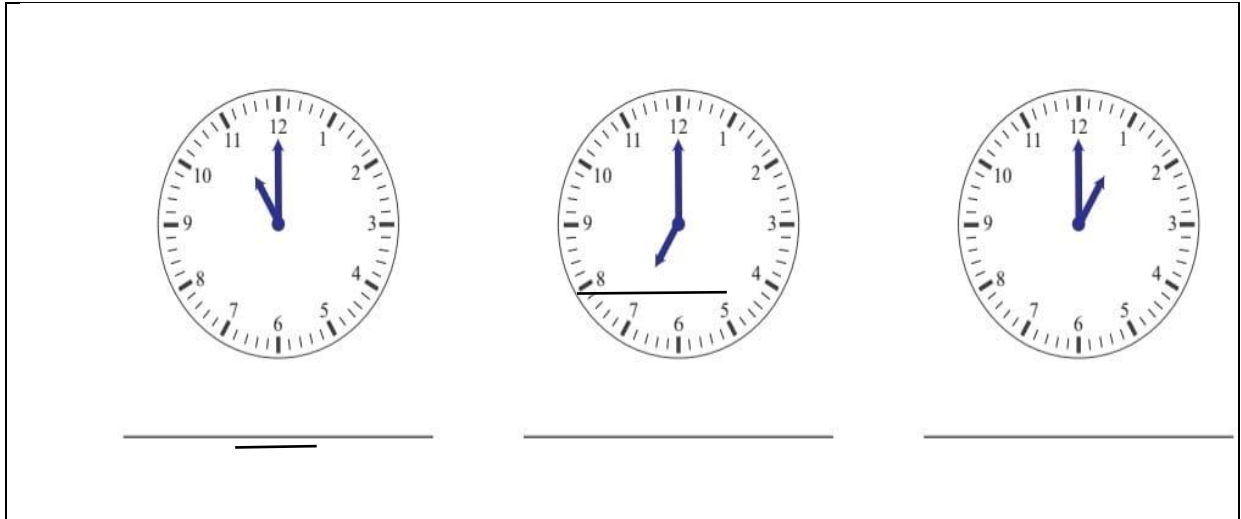
4. There are 57 birds in a tree. If 23 flew away then how many birds are left in the tree?
a) 33 b) 34 c) 35 d) 36

True or False

5. Wednesday comes after Thursday
6. We eat lunch in the afternoon
7. The day that comes before Sunday is Saturday
8. Combing hair takes more time

9. Write the name of the month.
a) That comes before July b) That comes after march

10. Write the time shown on the clocks using o'clock



11. Fill in the blanks

a)	November	
----	----------	--

b)	April	
----	-------	--

12. Travelling from Chennai to Delhi takes _____ time.

13. Brushing your teeth takes _____ time.

14. There are _____ days in a week.

15. There are _____ months in a year.

16. Add using the column method.

a) $33 + 45$

b) $72 + 26$

17. Subtract using column method.

a) $85 - 35$

b) $69 - 44$

18. write the days of the week

	Sunday	
		Tuesday
Thursday		

19. Write if the activity is done in the morning, afternoon, evening or night.

- a) Play with friends
- b) Take a bath and get ready for school
- c) Wearing a night suit
- d) Having lunch

20. 44 students are in a class. 15 more students join. How many students are there altogether now?

21. Sam have 57 balloons. He shared 14 balloons to Ravi. How many balloons are left with Sam now?

19. Write a story problem for $43 + 31$

Worksheet-2

1. Extend the pattern.

a. ○ □ □ ○ □ _____

b.

L	N	L	N	L					
---	---	---	---	---	--	--	--	--	--

c.

7	7	4	7	7					
---	---	---	---	---	--	--	--	--	--

d. □○○○○○○, □○○○○, _____,

e. ◆◆◆◆ _____

2. Skip count to complete the pattern.

a. 9, 12, 15, _____, _____, _____, _____.

b. 30, 40, 50, _____, _____, _____, _____.

c. 15, 20, 25, _____, _____, _____, _____.

d. 33, 34, 35, _____, _____, _____, _____.

3. Write true or false.

a. □ □ □ ○ □ □ □ ○ □ □ □ ○ is a growing pattern.

b. ♣ ♣ ♣ ♣ ♣ ♣ is a turning pattern. _____

c. ♥ ○ ○ ○ ○ ○ ○. ♥ is not a part of the group. _____

d. ⚽ ⚽ ⚽ ⚽ ⚽ ⚽. There are 7 balls _____


4. How many triangles will be there in the next term?

△△△△△, △△△△, △△△,


5. Make turning pattern using the figure ↑

6. Create number pattern using starting from 24 by adding 2. Give at least 5 terms.

7. Count and write the number of things.

a.  _____

b.  _____

c.  _____

d.  _____

8. In a class, favourite subject of 8 students is English, 10 students Maths, 3 students Science and 2 students Art. Write the header and fill the table with the data given above.

9. Look at the data in the above table and answer the given questions.

a. Most favourite subjects. _____

b. Least favourite subjects. _____

c. How many students like Math? _____

d. How many students like English? _____

10. If 3 students change their favourite subjects from Math to Art, which will be the most liked subject? Draw table and show the new data.